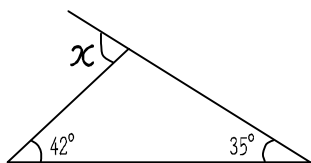


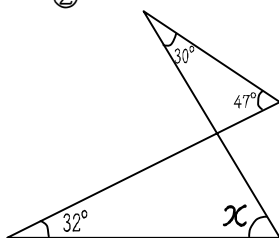
61 角度 2

1. 次の角度を求めよ。

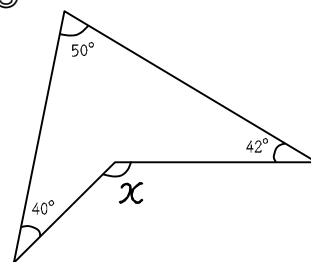
①



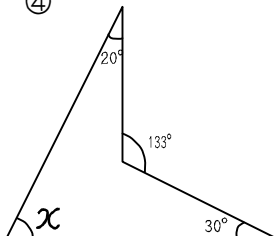
②



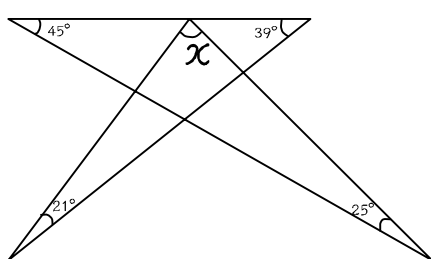
③



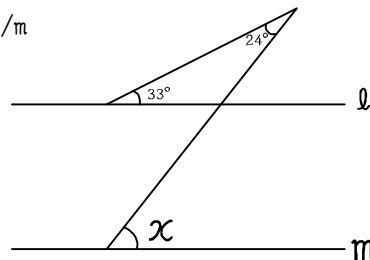
④



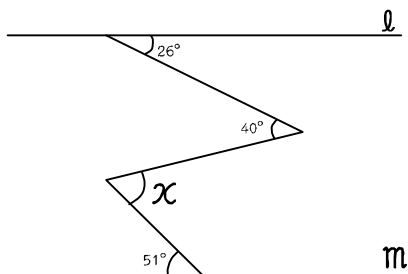
⑤



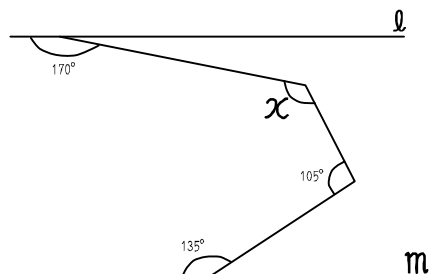
⑥ $l // m$



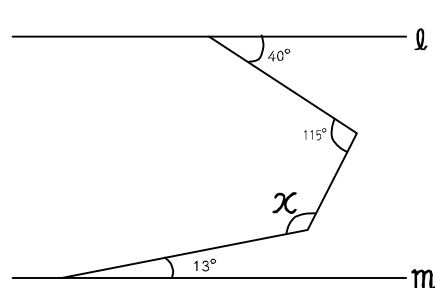
⑦ $l // m$



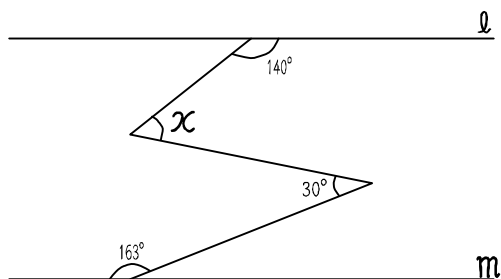
⑧ $l // m$



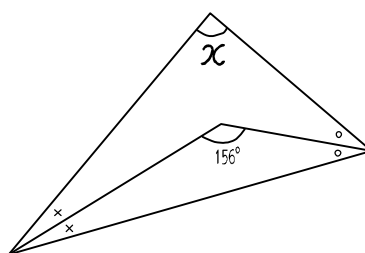
⑨ $l // m$



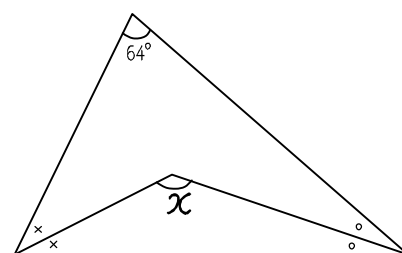
⑩ $l // m$



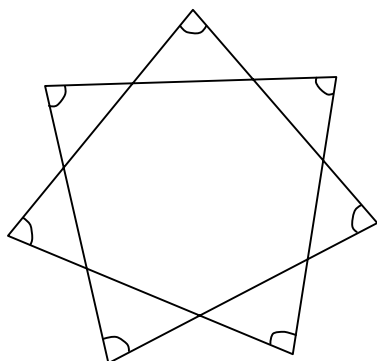
⑪ 同じ印は同じ角度



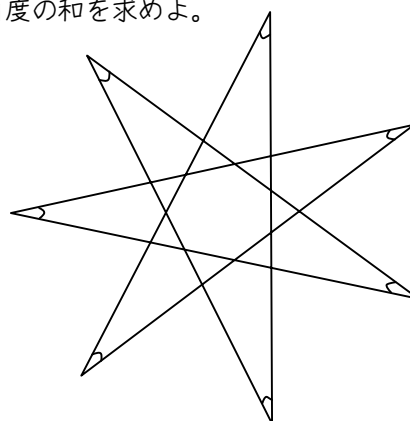
⑫ 同じ印は同じ角度



⑬ 印をつけた角度の和を求めよ。



⑭ 印をつけた角度の和を求めよ。



62 答

① 77° ② 45° ③ 132° ④ 83° ⑤ 50° ⑥ 57° ⑦ 65° ⑧ 130° ⑨ 118° ⑩ 53° ⑪ 132° ⑫ 122° ⑬ 540° ⑭ 180°